






Focus
Standards
and Claim

Claim 2
4.NF.A.2

Stimulus

Clay Pottery

Lizzie and Zela are interested in making pottery. The following chart shows how much clay is needed to make different projects.

Project	Pounds of Clay Needed
 Small Plate	$2\frac{1}{2}$
 Small Bowl	$1\frac{1}{2}$
 Large Bowl	$3\frac{1}{4}$
 Dinner Plate	$4\frac{1}{2}$
 Mug	$\frac{3}{4}$

Item Prompt

Which project needs the most clay?

- A. Small Plate
- B. Small Bowl
- C. Large Bowl
- D. Dinner Plate
- E. Mug

Sample Responses

Sample Response A

D. Dinner Plate

Sample Response B

C. Large Bowl