






Focus  
Standards  
and Claim

Claim 2  
5.NF.A.2  
4.NF.A.2

Stimulus

### Clay Pottery

Lizzie and Zela are interested in making pottery. The following chart shows how much clay is needed to make different projects.

Project	Pounds of Clay Needed
 <b>Small Plate</b>	$2\frac{1}{2}$
 <b>Small Bowl</b>	$1\frac{1}{2}$
 <b>Large Bowl</b>	$3\frac{1}{4}$
 <b>Dinner Plate</b>	$4\frac{1}{2}$
 <b>Mug</b>	$\frac{3}{4}$

Item Prompt	How much more clay, in pounds, is needed to make a large bowl than a small bowl? <input type="text"/> <i>pounds</i>
-------------	--

## Sample Responses

Sample Response A	$2\frac{1}{2}$
Sample Response B	$1\frac{3}{4}$
Sample Response C	0